

Inequalities

$>$

$$x > -2$$

$<$

$$x < 4$$

\geq

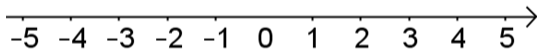
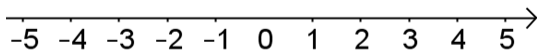
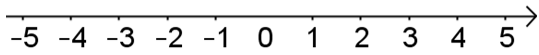
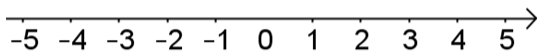
$$x \geq 1$$

\leq

$$x \leq -3$$

Examples

Glue here



Glue here